



# INDIAN SCHOOL NIZWA - ASSESSMENT

## MATHEMATICS Ch – 6 Footprints

Name : \_\_\_\_\_

Date \_\_\_\_\_

Class: II Sec: \_\_\_\_

Draw , colour and name the basic shapes :




## Matching Shapes







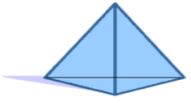


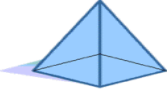
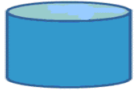
Name \_\_\_\_\_








Date \_\_\_\_\_



## IDENTIFY 3D SHAPES 2

Circle the correct word to describe each shape.

1)		cone	sphere	cylinder	prism
2)		cube	sphere	cone	pyramid
3)		pyramid	cuboid	cylinder	prism
4)		sphere	cone	pyramid	cube
5)		pyramid	cuboid	prism	cylinder
6)		prism	cone	pyramid	sphere
7)		sphere	prism	cone	cylinder

<i>Name of the thing</i>	<i>My guess</i>	<i>My result</i>
Glass 	_____ fingers	_____ fingers
Bucket 	_____ handspans	_____ handspans
Your hand 	_____ matchsticks	_____ matchsticks
Teacher's table 	_____ handspans	_____ handspans
Your nose 	_____ fingers	_____ fingers
Water bottle 	_____ fingers	_____ fingers
Your hair 	_____ handspans	_____ handspans